

Year 7 Assessment Algebraic Notation 1

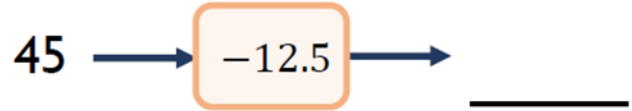
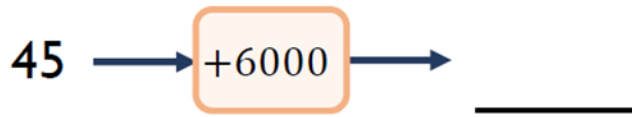
Total Score /20



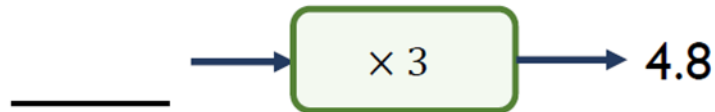

achildsguideto

Name: _____

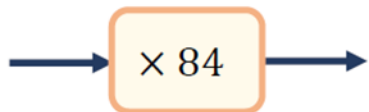
- 1 Find the output in each of these function machine when the input is 45



- 2 Find the missing numbers for each of these function machines.



- 3 What is the **inverse** function of this machine?



4

Simplify these expressions.

$6 \times 3d$ _____

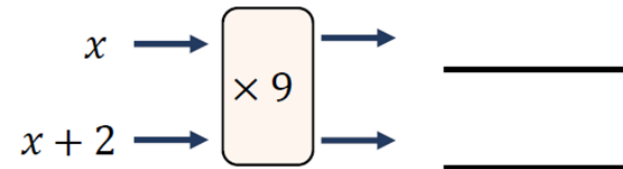
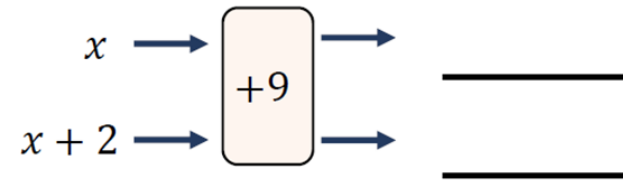
$e + 5e + 3e + 4e + e$ _____

$12f \div 3$ _____

1 mark

5

Write expressions to show each output.



6

Circle the expressions which equal one when $a=15$.

$a - 15$

$15 - a$

$\frac{15}{a}$

$\frac{a}{15}$

2 marks

1 mark

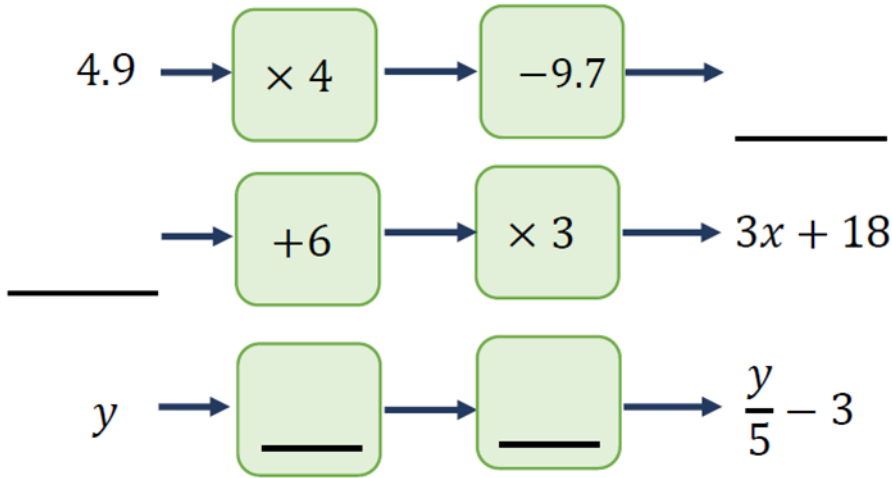
2 marks

3 marks

1 mark

7

Complete the missing values.



$x = 17$ and $y = 8$

Work out the value of the expression $\frac{x + y}{5}$

3 marks

1 mark

1 mark

1 mark

8

If the value of y increases, what will happen to the value of the expression?

9

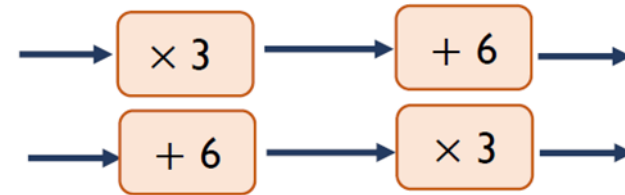
Tick the equations that are straight line graphs.

$y = 9 - x$ $y = 13 + 9x$

$y = 5 - \frac{x}{3}$ $y = 7x + 3$

10

Mia says that given the same input, both function machines will always have the same output.



Give an example to show Mia is **wrong**.

1 mark

11

Find the first three terms of these sequences.

$12 - 2n$ _____, _____, _____

$6n + 8$ _____, _____, _____

Describe a difference between the two sequences.

2 marks

1 mark



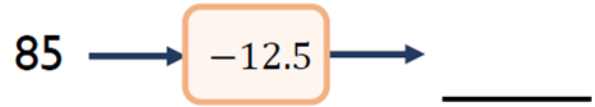
Year 7 Assessment Algebraic Notation 2

Total Score /20

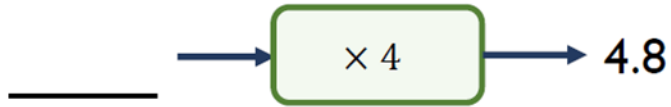
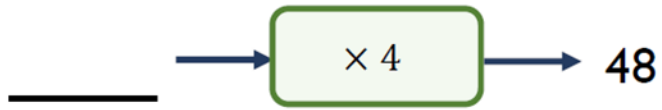


Name: _____

1 Find the output in each of these function machines when the input is 85



2 Find the missing numbers for each of these function machines.



3 What is the **inverse** function of this machine?



2 marks

3 marks

1 mark

4

Simplify these expressions.

$7 \times d$ _____

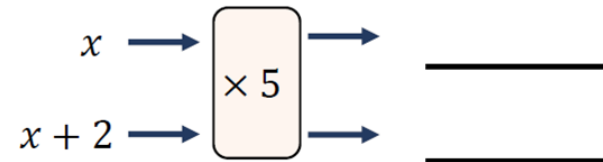
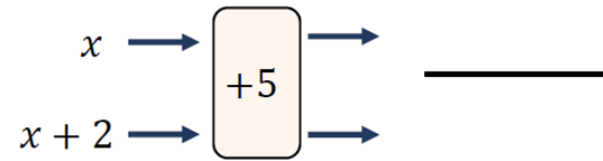
$e + 3e + 2e - 5e + 8e$ _____

$8f \div 2$ _____

1 mark

5

Write expressions to show each output.



2 marks

6

Circle the expressions which equal zero when $a=20$.

$a - 20$

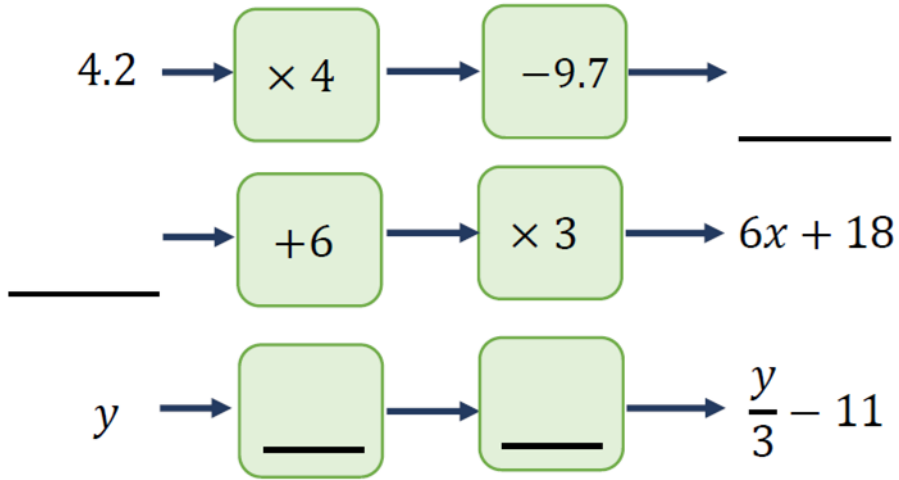
$20 - a$

$\frac{20}{a}$

$\frac{a}{20}$

1 mark

7 Complete the missing values.



8 $x = 16$ and $y = 8$
Work out the value of the expression $\frac{x + y}{3}$

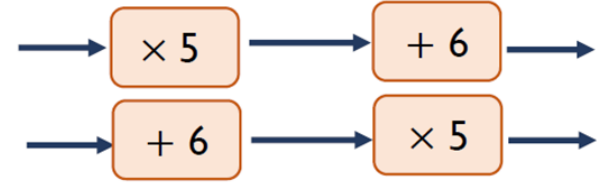
If the value of y increases, what will happen to the value of the expression?

9 Tick the equations that are straight line graphs.

$y = 9 - x^2$ $y = 13 + 9$

$y = 5^2 - \frac{x}{3}$ $y = 4x^2 + 3$

10 Mia says that given the same input, both function machines will always have the same output.



Give an example to show Mia is **wrong**.

11 Find the first three terms of these sequences.

$6 - 2n$ _____, _____, _____

$6n + 2$ _____, _____, _____

Describe a difference between the two sequences.

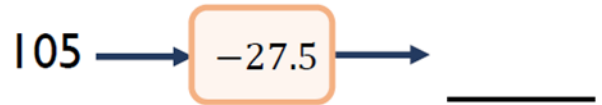
Year 7 Assessment Algebraic Notation 3

Total Score /20

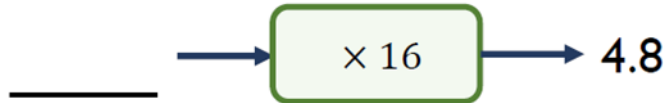



Name: _____

- 1 Find the output in each of these function machines when the input is 105



- 2 Find the missing numbers for each of these function machines.



- 3 What is the **inverse** function of this machine?



2 marks

3 marks

1 mark

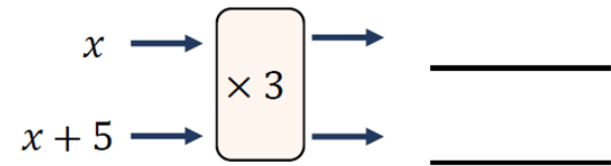
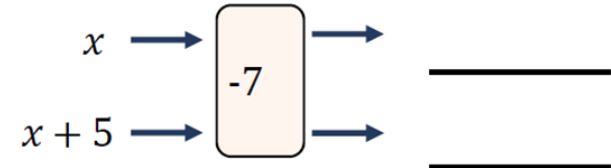
- 4 Simplify these expressions.

$3 \times d$ _____

$e + e + 2e - 7e + e$ _____

$15f \div 3$ _____

- 5 Write expressions to show each output.



- 6 Circle the expressions which equal two when $a=15$.

$a - 30$

$30 - a$

$\frac{30}{a}$

$\frac{a}{30}$

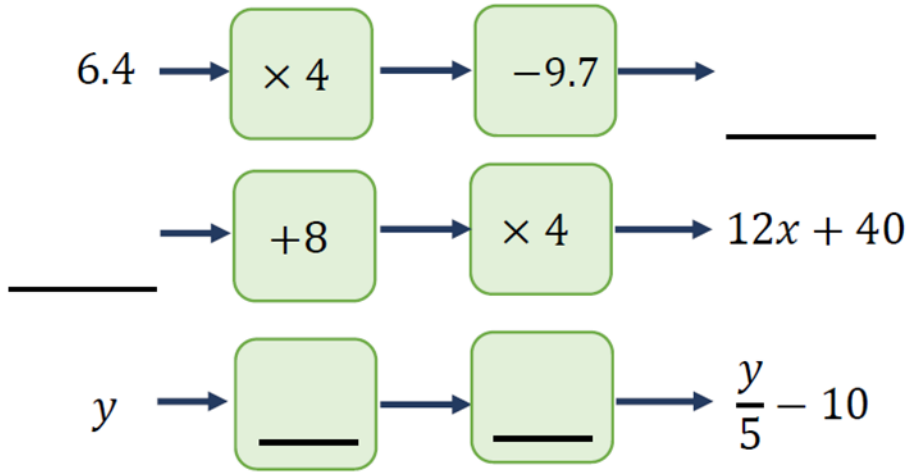
1 mark

2 marks

1 mark

7

Complete the missing values.



8

$x = 16$ and $y = 8$

Work out the value of the expression $\frac{x - y}{3}$

$\underline{\hspace{2cm}}$

If the value of y increases, what will happen to the value of the expression?

9

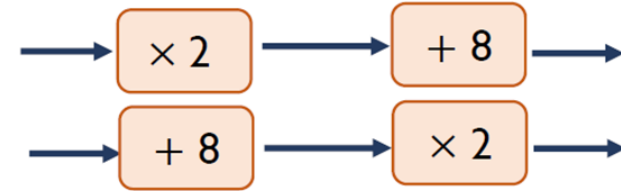
Tick the equations that are straight line graphs.

$y = 12 - x$ $y = 13 - 7$

$y = 5^2 - \frac{x}{3}$ $y = 4x^2 + 3x$

10

Mia says that given the same input, both function machines will always have the same output.



Give an example to show Mia is **wrong**.

11

Find the first three terms of these sequences.

$5 - 2n$ _____, _____, _____

$5n + 2$ _____, _____, _____

Describe a difference between the two sequences.

3 marks

1 mark

1 mark

1 mark

1 mark

2 marks

1 mark

